



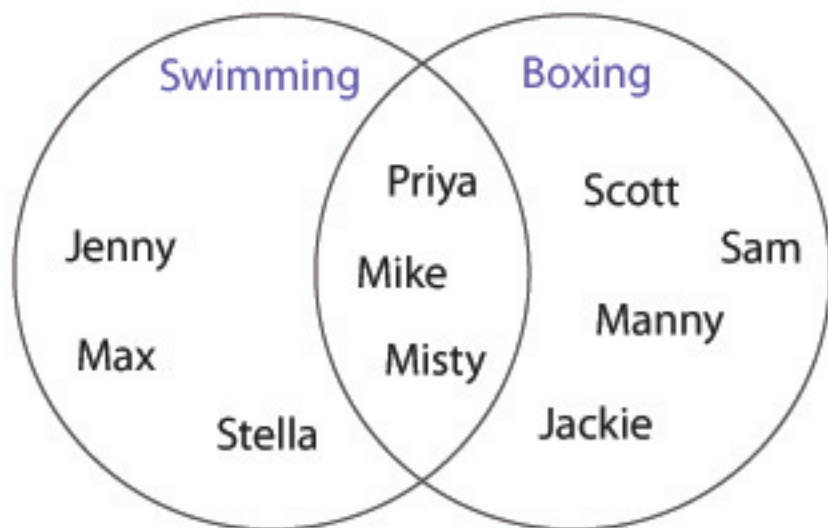
VENN DIAGRAM WORKSHEET

Name : _____

Level - 1

Date : ___/___/20___

Q. Study the given venn diagram carefully and answer the questions



1. Write the names of any two swimmers

2. How many people are both swimmers and boxers?

3. How many people are boxers?

4. Write the names of people who are only boxers

5. How many people are just swimmers?



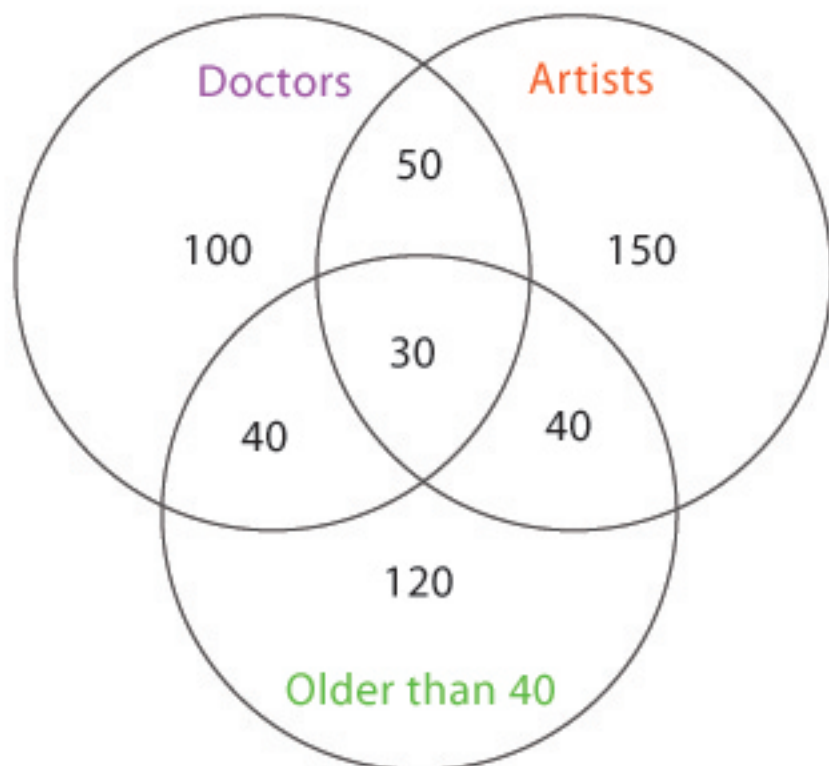
VENN DIAGRAM WORKSHEET

Name : _____

Level - 2

Date : ___/___/20___

Q. Study the given venn diagram carefully and answer the questions



1. How many Doctors are also an Artist?
2. How many Artists are older than 40?
3. How many Doctors are younger than 40?
4. How many 40+ Doctors are also an Artist?
5. Total number of Doctors are:
6. How many people are younger than 40?
7. How many 40+ are neither a Doctor nor an Artist?



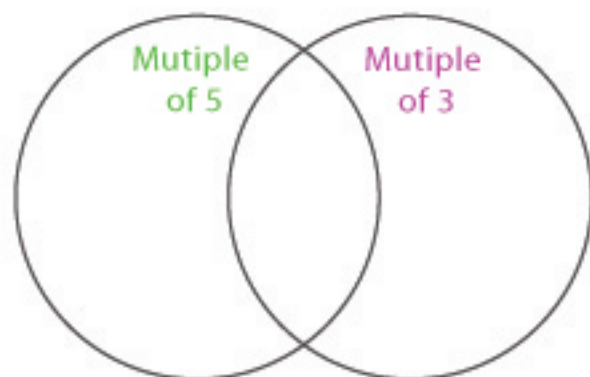
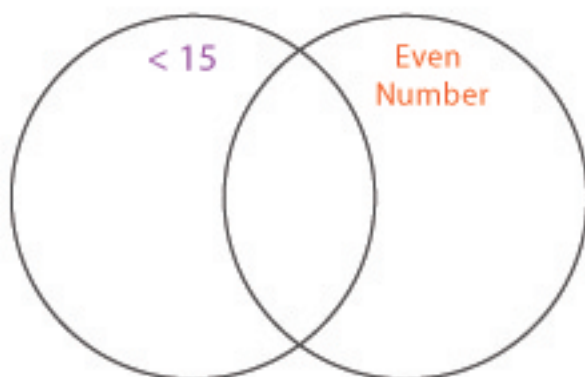
VENN DIAGRAM WORKSHEET

Name : _____

Level - 3

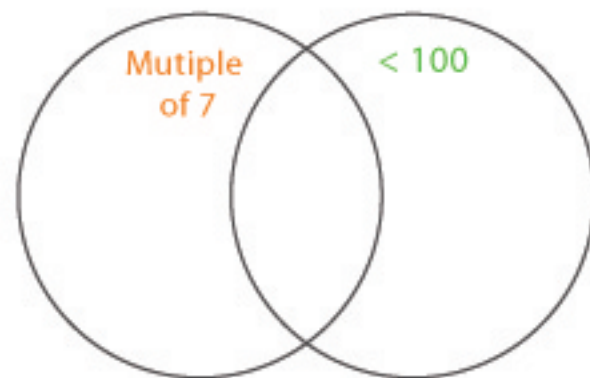
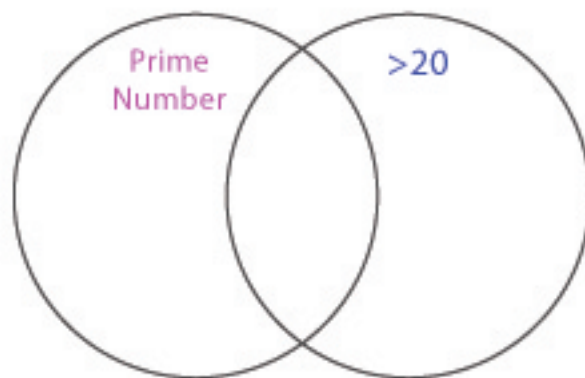
Date : ___/___/20___

Q. Put the numbers in the correct positions in these venn diagrams



2 18 17 5 8 10
11 14 27 1 54 9

15 65 108 33 210 9
25 6 10 13 85 153



3 23 83 17 21 27
89 55 7 13 43 41

14 147 43 63 9 101
199 91 35 110 210 3